





Name: _____

Salah Times

Using either your textbooks or workbooks, draw a line to match the Salah name to the correct sun and moon positions.



ISHAA

MAGHRIB

FAJR

ZUHR

ASR